



Veeramachaneni Paddayya
Siddhartha Public School, Vijayawada
(Sponsored by Siddhartha Academy of General & Technical Education)

PERIODIC TEST - I JULY-2024

Class : III
Date : 13/07/2024

Subject : E. Science

Marks: 40
Time: 1 1/2 hr

NAME: _____ CLASS/ SEC: _____ ROLL NO.: _____

I. FILL IN THE BLANKS: 5X1=5m

1. Leaves have _____ that help in breathing.
2. In our school, under _____ tree we assemble for prayer.
3. The medicinal plant that is worshipped in most of the houses is _____.
4. _____ is the largest animal on earth.
5. Birds fly with the help of their _____.

II. MULTIPLE CHOICE QUESTIONS: 5X1=5m

1. The tea we drink comes from this part of tea plant. ()
a. Roots b. Stem c. Fruit d. Leaves
2. Leaf patterns can be seen of objects like ()
a. Bedsheets b. Sarees c. Carpets d. All the above
3. These animals take shelter on leaves. ()
a. Leaf Insects b. Grasshopper c. Both a & b d. Rats
4. Water found under the ground is known as ()
a. SurfaceWater b. Ground water c. Rainwater d. None
5. Largest bird in the world is ()
a. Peacock b. Pigeon c. Hamming d. Ostrich

III. CIRCLE THE ODD ONE: 3x1=3m

1. Mountain River Lake Pond Stream
2. Duck Crocodile Monkey Tortoise Frog
3. Car Bus Van Truck Boat

PTO

IV. SOLVE THE RIDDLES AND NAME THE ANIMAL: 2X1=2m

1. Slow and steady is my pace. I always win when there is a race.

2. On the walls, webs I weave, where insects stick and can't leave.

V. ANSWER THE FOLLOWING QUESTIONS: 25 M

1. What do we call the edges of leaves which are straight, uneven or saw like? 1m

A. _____

2. Which river flows through Vijayawada city? 1m

A. _____

3. Name any two different ways of animal movements. 1m

A. a) _____ b) _____

4. List two leaves that can be identified by their smell. 1m

A. a) _____ b) _____

5. Mention any two activities that can be done without using water. 1m

A. a) _____ b) _____

6. Write two animals that have tail. 1m.

A. a) _____ b) _____

7. What is a Habitat? 2m.

A. _____

8. List any 4 sources of water. 2m.

A. a) _____ b) _____

c) _____ d) _____

9. How do leaves differ from each other? 2m.

A. _____

12. What are the forms of water? 2m.

Ans _____

13. What is the sound made by following animals? 2m.

a) Cat _____ b) Monkey _____
c) Dog _____ d) Frog _____

14. Write three different places where animals live. Give two examples for each. 3m.

Ans _____

15. Write three ways in which we use leaves in our daily life. 3m.

Ans _____

16. Name the containers which we use for storing water and write the place where we use. 3m.



Name of the container _____ place: _____



Name of the container _____ place: _____



Name of the container _____ place: _____



Veeramachaneni Paddayya
Siddhartha Public School, Vijayawada

(Sponsored by Siddhartha Academy of General & Technical Education)

PERIODIC TEST - JULY-2024-25

Class : III

Subject: MATHEMATICS

Marks: 40

Time : 1 ½ hr

Date : 12/07/2024

sil (2)

NAME: _____ CLASS/SEC: III/ _____ ROLL NO: _____




I. CHOOSE THE CORRECT ANSWER.

5 X 1 = 5 M

1) Which of the following alphabet has many mirror halves? []

- a) B b) H c) O




2) Which of the following is a triangle? []

- a)  b)  c) 

3) The place value of 9 in 269 is _____. []

- a) 9 b) 90 c) 900

4) Which of the following is divided into two similar mirror halves? []

- a)  b)  c) 

5) Virat scored 96 runs. How many more runs does he need to complete a century? []

- a) 6 b) 5 c) 4

II. FILL IN THE BLANKS.

6 X 1 = 6 M

1) The greatest 3 digit number formed by the digits 4, 8 and 9 is _____

2) The number exactly between 54 and 74 is _____

3) The numeral for 'Seven hundred nine' is _____

4) 6 more than 40 is _____

5) The successor of 289 is _____

6) The greatest 2-digit number is _____

III. MATCH THE FOLLOWING.

4 X 1 = 4 M

1) $500 + 30 + 4$ 290

2) $90 + 200$ 857

3) $800 + 7 + 50$ 879

4) $70 + 9 + 800$ 534

P.T.O

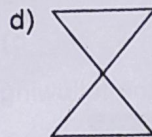
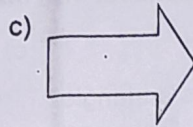


IV. ANSWER THE FOLLOWING.

1) Write the number name.


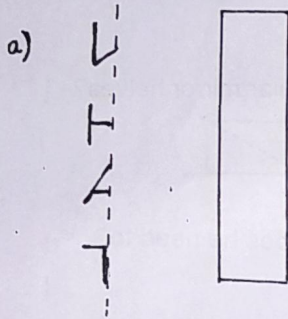
a) 685 : _____

b) 963 : _____

2) Draw a dotted line to divide the following into two similar mirror halves.



3) Identify the words by looking at their halves.



4) Arrange the following numbers in **ascending** order.

462 , 685 , 279 , 114 , 842

5) Draw any 2 figures which **cannot** be divided into two similar mirror halves.

V.ANSWER THE FOLLOWING .

5 X 3 = 15 M




1) Write the numbers between 690 and 721.

2) Continue the pattern.

a) 680 , 670 , 660 , _____ , _____

b) 215 , 315 , 415 , _____ , _____


c) 320 , 340 , 360 , _____ , _____

3) Draw  's ,  's and  's for the given numbers.

a) 342 :

b) 205 :

4) Which view is it?




5)	Student	Number of stamps collected
	Ravi	- 27
	Sonu	- 35
	Ram	- 48
	Arun	- 32

a) _____ collected the more number of stamps.

b) Arun has to collect _____ more stamps to be equal to Sonu.

c) _____ needs 3 more stamps to have 30.



Name: _____ Class/Sec: _____ Roll no: _____

SECTION - A(Reading Comprehension)

10 M

Read the passage carefully

Timmy was excited about his first day at school. He woke up early and got ready quickly. His mom packed his lunchbox with a sandwich, an apple, and a cookie. Timmy wore his new blue backpack and happily went to school. When Timmy arrived, his teacher, Mrs. Smith, greeted him with a big smile. Timmy made new friends, and they played with blocks and coloured pictures together. A little later, Timmy and his friends played in the playground. After that, Mrs. Smith read a story about a brave little dog. Timmy listened carefully and enjoyed the story.

During lunchtime, Timmy ate his sandwich and shared his cookie with his new friend, Sam. In the afternoon they sang songs and learned about numbers. Timmy enjoyed making a craft project using colourful paper and glue. In the evening Timmy went home and told his mom about all the fun he had. Timmy was eagerly waiting to go back to school the next day.

Answer the questions

1. Why was Timmy excited?

1M

A. _____

2. What did Timmy's mom pack in his lunchbox?

1M

A. _____

(a) Fill in: (2x1=2 M)

3. Timmy wore his new _____ to school.

4. When Timmy arrived, his teacher _____ a big smile.

(b) State whether the given statements are True (T) or False (F) (2x1=2 M)

5. Timmy and his friends played in the playground. ()

6. Timmy did not enjoy making a craft project. ()

(c) Write the past form of: (2x1=2 M)

a) pack - _____ b) share - _____


(d) Pick out the antonym from the passage : (2x1=2 M)

a) late x _____ b) old x _____

SECTION-B (COMPOSITION)

5M

A. Look at the picture carefully and frame any five sentences using the words given in the help- box



Park, climbing, reading, dog, scooter, happy

- 1. _____
- 2. _____
- 3. _____
- 4. _____
- 5. _____

B. (GRAMMAR)

10M

(a) Fill in with suitable describing word from the help-box

(5x1=5M)

colourful, five, red, new, long

- 1. Rohan bought a _____ car because it is his favourite colour.
- 2. Can you tie your _____ hair?
- 3. I got many _____ dresses on my birthday.
- 4. The funny monkey ate _____ bananas
- 5. These birds have _____ feathers.

(b) Frame questions by changing the position of the underlined word and re-write them

(5x1=5M)

1. Anne was in London last week.

A. _____

2. Delhi is the capital of India.

A. _____

3. He can speak three languages

A. _____

4. She is wearing jeans and a T-shirt.

A. _____

5. There are many tables in the hall.

A. _____

SECTION - C (LITERATURE)

15M

(a) Choose the correct answer

(3x1=3M)

1. The birds loved the little children because they brought _____ for them

- a) bread
- b) grains.
- c) biscuits

2. Nina's mother suggested that they would _____ things from her room to another

- a) clean
- b) shift
- c) prepare

3. Children of the school were the little _____

- a) gardeners
- b) soldiers
- c) angels

(b) Fill in the blanks

(5x1=5M)

- 1. Children brought watering cans to _____ the plants.
- 2. The child says ' Good Morning ' to the sky, the sun, _____ creeping grass and brownie bees.
- 3. Birds think that _____ are funny.
- 4. There was great joy in Nina's house because her _____ was getting married.
- 5. The fairies danced and sang _____

(c) Answer the following questions

1. What does the child want to do? 1M

A. _____

2. What sounds could the children hear in the magic garden? 1M

A. _____

3. Name the two birds in the poem. 1M

A. _____

4. What are the three things that people can't do? 2M

A. _____

5. What did Nina find when she came back from the wedding? 2M

A. _____



Veeramachaneni Padayya
Siddhartha Public School, Vijayawada
(Sponsored By Siddhartha Academy of General & Technical Education)

PERIODIC TEST-I JULY-2024-25

Class : III
Date : 10 /07/2024

Subject: II LANG(HINDI)

Marks: 40
Time : 1½ hr.

Name: _____ Class/Sec: _____ Roll no.: _____

I) पद्य पूरा लिखिए : (4 lines) 2M

नाम है उसका कक्कू

नाम है उसका कक्कू ॥

II) दिये गए शब्दों के अर्थ लिखिए : 6X1=6M

1) गुस्सा = _____ 2)आराम = _____ 3)कोयल = _____

4) सदा = _____ 5)लोमड़ी = _____ 6)नाम = _____

III) इनके विलोम शब्द लिखिए : 3X1=3M

1)पास x _____ 2) एक x _____ 3) रोना x _____

IV) इनके वचन बदलकर लिखिए : 3X1=3M

1) मैं - _____ 2) बात - _____ 3) कहानी - _____

V) इनके लिंग बदलकर लिखिए : 2X1=2M

1) शेर - _____ 2) पिता - _____

VI) इनके समानार्थ लिखिए : 3X1=3M

1) जंगल - _____ 2)गाना - _____ 3)दिन - _____

VII) दिए गए शब्दों को 'अनुस्वार' या 'अनुनासिक' लगाकर सही

शब्द लिखिए : 4X1=4M

1) हिंदी - _____ 2) ऊट - _____

3) हसना - _____ 4) बदर - _____

VIII) उचित शब्द से खाली स्थान भरिए : 3X1=3M

1) कोयल की आवाज़ _____ होती है। (मीठी / कड़वी)

2) जंगल में _____ आराम कर रहा था। (मछली / शेर)

3) _____ ने मक्खी को प्रणाम किया। (शेर / हाथी)

IX) इन शब्दों को वाक्य में प्रयोग कीजिए :

2X1=2M

1) कभी-कभी :

2) प्रणाम करना :

X) इन वाक्यों में से संज्ञा शब्द चुनकर लिखिए :

3X1=3M

1) गुब्बारे हवा में उड़ते हैं। _____

2) दूध गरम है। _____

3) मोर नाच रहा है। _____

XI) इन प्रश्नों के उत्तर लिखिए :

1) दिन भर कौन रोता है ?

1M

ज. _____

2) कोयल की आवाज़ कैसी होती है ?

1M

ज. _____

3) लोमड़ी ने मक्खी को किसके ऊपर गुस्सा करने को कहा ?

2M

ज. _____

4) मक्खी शेर के पास जाकर भिन - भिन क्यों करने लगी ?

2M

ज. _____

5) मक्खी ने हाथी से क्या कहा ?

3M

ज. _____



Veeramachaneni Paddayya

Siddhartha Public School, Vijayawada

(Sponsored by Siddhartha Education Society, Vijayawada)

PERIODIC TEST - JULY-2024

Class - III

Date - 10/07/2024

Subject: II LANG (TELUGU)

NAME: _____ CLASS/SEC: _____ ROLL NO _____

I. క్రింది పద్యాలలో ఒకదానినీ పాదభంగం లేకుండా పూరింపుము

1 X 4 = 4

1. అనగనగా _____

_____ వేమ!

(లేదా)

2. బహుళ _____

_____ వేమ!

II. క్రింది పదాలకు సరైన అర్థాలు గుర్తించి వ్రాయుము

5X1=5

1. రేడు = _____ ()

అ) రాణి ఆ) రాజు ఇ) మంత్రి

2. సాధనము = _____ ()

అ) అభ్యాసం ఆ) వేపాకు ఇ) అనుకూలం

3. ధర = _____ ()

అ) భూమి ఆ) నింగి ఇ) ఆకాశం

4. పండితుడు = _____ ()

అ) అన్నీ తెలిసిన వాడు ఆ) తెలియనివాడు ఇ) ఏమీ రాని వాడు

P.T.O

5. పోరుగూడు = _____ ()

అ) కొత్త లోకం ఆ) సాత లోకం ఇ) పక్కమూరు

III క్రింది ఇచ్చిన పదాలకు వ్యతిరేక పదాలు గుర్తించి వ్రాయుము.

4 x 1 = 4

1) నిద్ర x _____ ()

అ) మెలకువ ఆ) విచారం ఇ) భయం

2. లోపల x _____ ()

అ) బయట ఆ) వెలుపల ఇ) అవతల

3. రాత్రి x _____ ()

అ) పగలు ఆ) నింగి ఇ) సాతాళం

4. హింస x _____ ()

అ) పగలు ఆ) అదృష్టం ఇ) అహింస

IV. ఈ క్రింది ఖాళీలలో సమాధానాలు గుర్తించి వ్రాయుము.

5X1=5

1. సాధనమున _____ సమకూరు ధరలోన. ()

అ) కురులు ఆ) పనులు ఇ) అరులు

2. పరమానందయ్య శిష్యులకు వయస్సు పెరిగినా _____ పెరగలేదు ()

అ) బుద్ధి ఆ) ఎత్తు ఇ) పొడుగు

3. కదలవోయి _____ కుమారా. ()

అ) తెలంగాణ ఆ) ఆంధ్ర ఇ) తమిళనాడు

4. మనం ఇంటికి వచ్చే అతిథులను గౌరవించి _____ చెయ్యాలి. ()

అ) దండన ఆ) కోపం ఇ) మర్యాద

5. చలి కాలపు చన్నీళ్ళకు దొంగలు _____ వణికారు. ()

అ) వలవల ఆ) గజగజ ఇ) గలగల

P.T.O

V. క్రింది ఇచ్చిన ఏక వచన పదాలకు బహువచనాలు వ్రాయుము.

5X1=5

1. అందం - _____
2. గుడి - _____
3. కట్టు - _____
4. మేడ - _____
5. కన్ను - _____

VI. క్రింది ఇచ్చిన పదాలను ఉపయోగించి సొంత వాక్యాలు వ్రాయుము. 2X1=2

1. చిక్కమొహం ; - _____
2. జాబిల్లి : - _____

VII. క్రింది ప్రశ్నలకు సరైన సమాధానాలు వ్రాయుము.

3X1=3

1. 'తెలుగు తల్లి' గేయ రచయిత ఎవరు ?

జ) _____

2. పరమానందయ్య గారికి ఎంత మంది శిష్యులు ?

జ) _____

3. తెలుగు తల్లిని కవి వేటి తో పోల్చారు ?

జ) _____

1). పరమానందయ్య శిష్యులు దొంగలకు ఎలాంటి మర్యాద చేశారు ?

1X2=2

జ) _____

P.T.O

VIII. క్రింది గేయమును చదివి ఇచ్చిన ప్రశ్నలకు సమాధానము వ్రాయుము.

4X1=4

స్వామివివేకానంద రామకృష్ణ పరమహంస ప్రియ శిష్యుడు. గురువుగారి కోరిక మేరకు హిందూ మత ప్రాశస్త్యం గురించి అమెరికాలో ఉపన్యసించడానికి వెళ్ళాడు. వివేకానందునికి అమెరికా ప్రజానీకం బ్రహ్మారథం పట్టారు. భారత ప్రభుత్వం ఆయన జన్మదినాన్ని 'జాతీయ యువజన దినోత్సవం'గా ప్రకటించింది

ప్రశ్నలు:-

1) వివేకానంద ఎవరి ప్రియ శిష్యుడు?

- అ) రాఘవులు ఆ) రవీంద్రుడు ఇ) రామకృష్ణ పరమహంస ()

2. వివేకానందుడు ఎక్కడ ఉపన్యసించడానికి వెళ్ళాడు?

- అ) అమెరికా ఆ) ఆస్ట్రేలియా ఇ) ఇంగ్లాండ్ ()

3) అమెరికా ప్రజానీకం ఎవరికి బ్రహ్మారథం పట్టారు?

- అ) స్వామీజీ ఆ) వివేకానందునికి ఇ) వరుణుడికి ()

4) భారత ప్రభుత్వం వివేకానందుని జన్మదినాన్ని ఏ దినోత్సవం గా ప్రకటించింది

- అ) యువజన ఆ) సృజన ఇ) సజ్జన ()

IX) క్రింద ఇచ్చిన పదాలను సరైన విధంగా జతపరుచుము 6X1=6

- 1) చంద్రశాల. పేరయ్య
- 2) జాబిల్లి చలువరాతి మేడ
- 3) తెలుగు తల్లి అనుకోకుండా వచ్చేవారు
- 4) పరమానందయ్య శిష్యులు చందమామ
- 5) పరమానందయ్య స్నేహితుడు మన చల్లని తల్లి
- 6) అతీదులు ఒట్టి అమాయకులు



Class: III
Date: 09/07/2024

Name: _____ Class/Sec: III/____ R. No: _____

Instructions: 1. Carefully read all the questions and answer them.
2. Maintain neat handwriting.

I. Fill in the blanks

5x1=5m

1. A computer accepts data and instructions from you through _____.
2. External hard disk can be connected with the help of _____ ports.
3. _____ is known as the brain of computer.
4. Full form of ROM _____.
5. _____ is used to record voice and music into a computer system.

II. Match the following

5x1=5m

- | | | |
|---------------------|----------------------|-----------|
| 1. CD | output | [] |
| 2. System software | inputdevice | [] |
| 3. RAM | windows xp | [] |
| 4. Input->Process-> | random access memory | [] |
| 5. Mouse | storage device | [] |

III. Answer the following

5x2=10m

1. Name the parts of a Computer.

A. _____

2. What is a computer?

A. _____

3. What is a Hard disk?

A.

4. What is Hardware?

A.

5. What is byte?

A.

Note: This paper contains two printed pages.